









Worksheet 1: Count and Write

	=	_____
	=	_____
	=	_____
	=	_____
	=	_____
	=	_____
	=	_____
	=	_____

Worksheet 2: Number Names

1	One	_____
2	Two	_____
3	Three	_____
4	Four	_____
5	Five	_____
6	Six	_____
7	Seven	_____
8	Eight	_____
9	Nine	_____
10	Ten	_____

Worksheet 3: Count, Write and Add

$$\bullet \bullet () + \bullet () = \underline{\hspace{2cm}}$$

$$\bullet \bullet \bullet () + \bullet \bullet () = \underline{\hspace{2cm}}$$

$$\bullet () + \bullet \bullet () = \underline{\hspace{2cm}}$$

$$\bullet \bullet \bullet () + \bullet () = \underline{\hspace{2cm}}$$

$$\bullet \bullet () + \bullet \bullet () = \underline{\hspace{2cm}}$$

$$\bullet () + \bullet \bullet \bullet () = \underline{\hspace{2cm}}$$

$$\bullet \bullet \bullet \bullet () + \bullet () = \underline{\hspace{2cm}}$$

$$\bullet \bullet () + \bullet () = \underline{\hspace{2cm}}$$

Worksheet 4: Count, Write and Subtract

$$\bullet \bullet \bullet \bullet () - \bullet \bullet () = \underline{\hspace{2cm}}$$

$$\bullet \bullet \bullet () - \bullet () = \underline{\hspace{2cm}}$$

$$\bullet \bullet \bullet \bullet \bullet () - \bullet \bullet \bullet () = \underline{\hspace{2cm}}$$

$$\bullet \bullet \bullet \bullet () - \bullet () = \underline{\hspace{2cm}}$$

$$\bullet \bullet \bullet () - \bullet \bullet () = \underline{\hspace{2cm}}$$

$$\bullet \bullet \bullet \bullet \bullet () - \bullet \bullet () = \underline{\hspace{2cm}}$$

$$\bullet \bullet \bullet \bullet () - \bullet \bullet \bullet () = \underline{\hspace{2cm}}$$

$$\bullet \bullet \bullet \bullet \bullet () - \bullet () = \underline{\hspace{2cm}}$$